

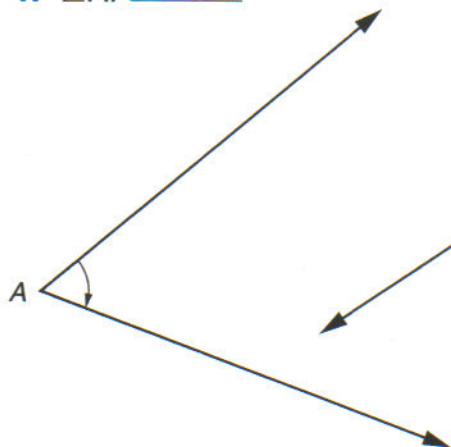
**STUDY LINK**  
**6·7**

# Measuring Angles with a Protractor

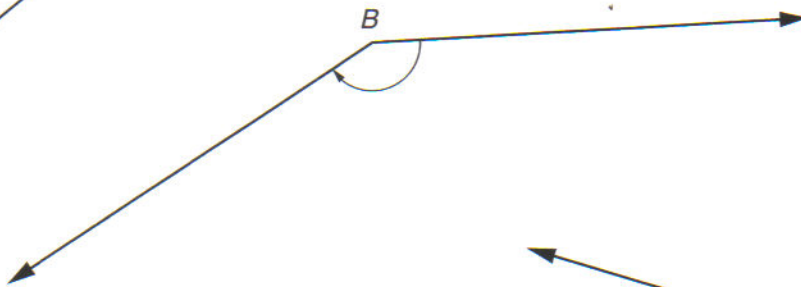


First estimate whether the angles measure more or less than  $90^\circ$ . Then use a half-circle protractor to measure them.

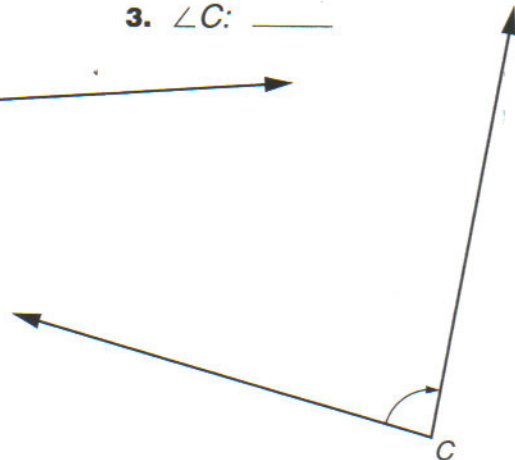
1.  $\angle A$ : \_\_\_\_\_<sup>o</sup>



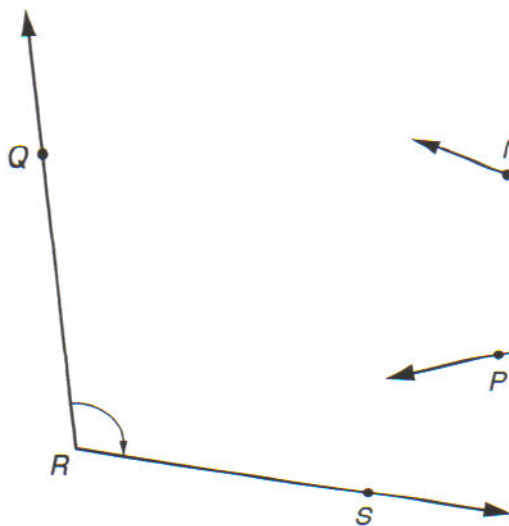
2.  $\angle B$ : \_\_\_\_\_<sup>o</sup>



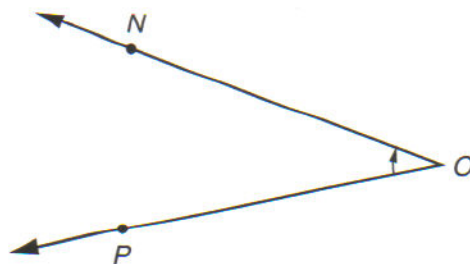
3.  $\angle C$ : \_\_\_\_\_<sup>o</sup>



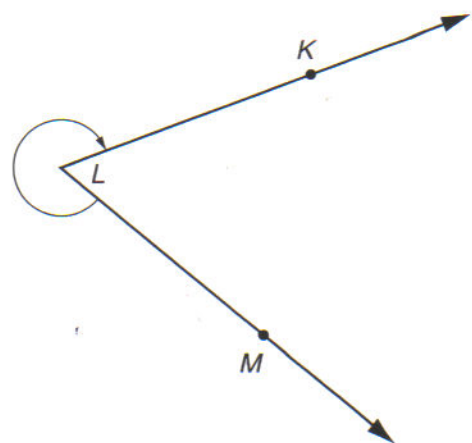
4.  $\angle QRS$ : \_\_\_\_\_<sup>o</sup>



5.  $\angle NOP$ : \_\_\_\_\_<sup>o</sup>



6.  $\angle KLM$ : \_\_\_\_\_<sup>o</sup>


**Try This**
**Practice**

7.  $93 * 6 =$  \_\_\_\_\_

8. \_\_\_\_\_ =  $547 * 7$

9. \_\_\_\_\_ =  $48 * 39$

10.  $51 * 64 =$  \_\_\_\_\_